

# Oxford Physics Aptitude Test (PAT) 2008 Solutions

## Maths

$$1) 1+2+3+\dots+99+100 = \frac{n}{2}(n+1) = \frac{100}{2}(101) = 5050$$

$$2) (0.25)^{-1/2} = \left(\frac{1}{4}\right)^{-1/2} = (4)^{1/2} = 2$$

$$(0.09)^{3/2} = (0.3)^3 = 0.027$$

$$3) (1+x)^{m+1} (1-2x)^m \approx \left[1 + (m+1)x + \frac{(m+1)(m)x^2}{2}\right] \left[1 - 2mx + \frac{4m(m-1)x^2}{2}\right]$$
$$= 1 + (m+1-2m)x + \left(\frac{2m^2-2m-2m^2-2m+\frac{m^2}{2}+\frac{m}{2}}{2}\right)x^2$$
$$= 1 + (1-m)x + \left(\frac{m^2-7m}{2}\right)x^2$$

$$4) \frac{x^2+2}{1-x^2} < 3$$

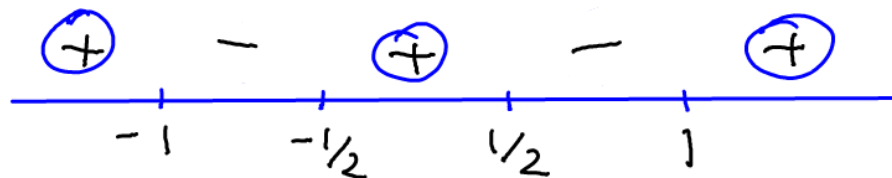
$$(x^2+2)(1-x^2) < 3(1-x^2)^2$$

$$2 - x^2 - x^4 < 3 - 6x^2 + 3x^4$$

$$0 < 4x^4 - 5x^2 + 1$$

$$0 < (4x^2-1)(x^2-1)$$

$$0 < (2x-1)(2x+1)(x-1)(x+1)$$



$$\{x < -1\} \cup \{-1/2 < x < 1/2\} \cup \{x > 1\}$$

$$5) i) \log_2 9 = \frac{\log_9 9}{\log_9 2} = \frac{1}{x}$$

$$ii) \log_9 3 = \frac{\log_9 3}{\log_9 8} = \frac{1/2}{\log_9 (2^3)} = \frac{1}{2} \cdot \frac{1}{3 \log_9 2} = \frac{1}{6x}$$

$$6) x^2 - 1 = x - x^2$$
$$2x^2 - x - 1 = 0$$
$$(2x + 1)(x - 1) = 0$$
$$x = -\frac{1}{2} \text{ or } 1$$

$$7) y = x + \frac{x^2}{2} + \frac{x^3}{3} + \dots$$
$$\frac{dy}{dx} = 1 + x + x^2 + \dots$$

$$y = ax$$
$$m = a$$

$$\text{When } x = 0, \frac{dy}{dx} = 1 \Rightarrow a = 1$$

$$\text{When } x = \frac{1}{4}, \frac{dy}{dx} = 1 + \frac{1}{4} + \left(\frac{1}{4}\right)^2 + \dots \text{ G.P. with } r = \frac{1}{4},$$

$$\Rightarrow \frac{dy}{dx} = \frac{1}{1 - 1/4} = \frac{4}{3} \Rightarrow a = \frac{4}{3}$$

$$8) \text{ Centre} = \text{mid-point} = \left( \frac{5-3}{2}, \frac{8+2}{2} \right) = (1, 5)$$

$$\text{Radius, } r = \sqrt{(5-1)^2 + (2-5)^2}$$

$$r^2 = 25$$

$$\Rightarrow (x-1)^2 + (y-5)^2 = 25$$

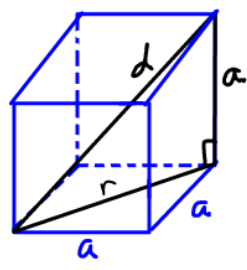
9) This is like having a 9-faced die with 2, 3, 4, three 5s and three 6s.

$$P(2) = \frac{1}{9}, P(3) = \frac{1}{9}, P(4) = \frac{1}{9}, P(5) = \frac{3}{9}, P(6) = \frac{3}{9}$$

i)  $\frac{1}{9}$

ii)  $P(S > 10) = P(4, 6) + P(5, 5) + P(5, 6) + P(6, 4) + P(6, 5) + P(6, 6)$   
 $= \left(\frac{1}{9} \times \frac{3}{9}\right) + \left(\frac{3}{9} \times \frac{3}{9}\right) + \left(\frac{3}{9} \times \frac{3}{9}\right) + \left(\frac{3}{9} \times \frac{1}{9}\right) + \left(\frac{3}{9} \times \frac{3}{9}\right) + \left(\frac{3}{9} \times \frac{3}{9}\right)$   
 $= \frac{1}{81} (3 + 9 + 9 + 3 + 9 + 9) = \frac{42}{81} = \frac{14}{27}$

10)



$$r^2 = a^2 + a^2 = 2a^2$$

$$d^2 = a^2 + r^2 = 3a^2$$

$$d = \sqrt{3} a$$

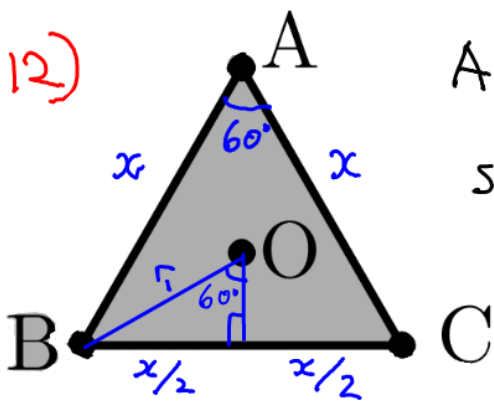
11) i)  $\int_{-1}^1 (x + x^3 + x^5 + x^7) dx = \left[ \frac{x^2}{2} + \frac{x^4}{4} + \frac{x^6}{6} + \frac{x^8}{8} \right]_{-1}^1$

= 0

ii)  $\int_0^1 \frac{x^9 + x^{99}}{11} dx = \frac{1}{11} \left[ \frac{x^{10}}{10} + \frac{x^{100}}{100} \right]_0^1 = \frac{0.11}{11}$

= 0.01

12)

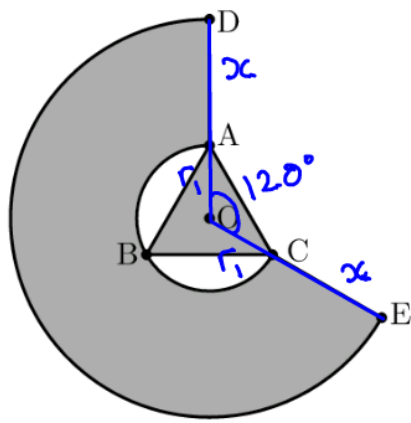


$$A_{ABC} = \frac{1}{2} x^2 \sin 60 = \frac{\sqrt{3}}{4} x^2$$

$$\sin 60 = \frac{x}{2} = \frac{1}{r}$$

$$r = \frac{x}{\sqrt{3}}$$

Area of small circle,  $A_1 = \pi r^2 = \frac{\pi x^2}{3}$



Area of big circle,

$$A_2 = \pi(x+r_1)^2 = \pi x^2 + \frac{x^2\pi}{3} + \frac{2x^2\pi}{\sqrt{3}}$$

$$= 2\pi x^2 \left( \frac{2+\sqrt{3}}{3} \right)$$

$$A_{ADEOC} = \frac{240}{360} (A_2 - A_1)$$

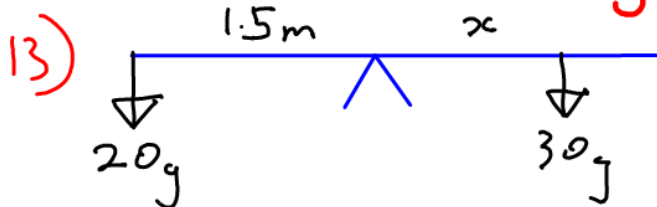
$$= \frac{2}{3} \left[ 2\pi x^2 \left( \frac{2+\sqrt{3}}{3} \right) - \frac{\pi x^2}{3} \right]$$

$$= \frac{2\pi x^2}{9} (4 + 2\sqrt{3} - 1) = \frac{2\pi x^2}{9} (3 + 2\sqrt{3})$$

$$\frac{A_{ADEOC}}{A_{ABC}} = \frac{2\pi x^2}{9} (3 + 2\sqrt{3}) \div \frac{\sqrt{3}}{4} x^2$$

$$= \frac{8\pi(3+2\sqrt{3})}{9\sqrt{3}} = \frac{8\pi(\sqrt{3}+2)}{9}$$

## Physics



$$20g(1.5) = 30gx$$

$$x = 1\text{m}$$

Ans: D

$\therefore$  She must sit  $1.5 + 1 = 2.5\text{m}$  away

14) Energy released comes from the decrease in mass. Ans: B

15)  $M = 2 \times 10^{30} \times 250 \times 10^9 \times 400 \times 10^4 \times 21$

$$= 20 \times 10^4 \times 21 \times 10^{48} = 4.2 \times 10^{54} \text{kg} \quad \text{Ans: D}$$

16) Moon between the Earth and the Sun. Ans: A

17)  $\rho = \frac{m}{V} \Rightarrow \rho$  stays constant.

$\rho \propto T \Rightarrow$  pressure increases

Ans: C

$$18) GPE = mgh = 60 \times 10 \times 4 = 2400 \text{ J} \quad \text{Ans: B}$$

$$19) E = IVt$$

$$0.1 \times (1 \times 10^3) \times 0.25^2 \times t (\text{hours}) = 0.7 \times 3.6 \times 1 (\text{hour})$$

$$\text{Ans: C} \quad t = \frac{3.6 \times 0.7 \times 16}{100} = 0.40 \text{ hours}$$

$$20) P = \frac{V^2}{R} \quad \text{Max } P \text{ when } R \text{ is min} \Rightarrow \text{noon}$$

Ans: C

$$21) m_w c \Delta T = \frac{1}{2} m_b v^2$$

$$2^3 \times 1000 \times 4.2 \times 10^3 \Delta T = 0.5 \times 0.01 \times 400^2$$

$$\text{Ans: A} \quad \Delta T = \frac{800}{8 \times 4.2 \times 10^6} = \frac{1}{4.2 \times 10^4} = 2.4 \times 10^{-5}$$

$$22) \text{Both sides } \times 10^{-3} \Rightarrow \text{mJ} \quad \text{Ans: A}$$

$$23) \text{Given: } q = CV, \quad C = \frac{\rho A}{d}$$

$$W = \frac{q^2}{2C} = \frac{C^2 V^2}{2C} = \frac{CV^2}{2} = \frac{\rho A V^2}{2d}$$

$$\text{Given } V_{\text{max}} = Bd,$$

$$E_{\text{max}} = \frac{\rho A V_{\text{max}}^2}{2d} = \frac{\rho A B^2 d^2}{2d} = \frac{\rho A B^2 d}{2} = \frac{\rho B^2 V}{2}$$

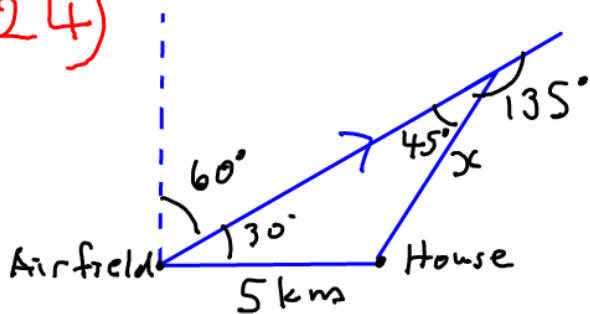
$$\text{Using } m = DV, \quad E_{\text{max}} = \frac{m \rho B^2}{2D}$$

For  $\rho = 2 \times 10^{-11} \text{ Fm}^{-1}$ ,  $B = 2 \times 10^7 \text{ Vm}^{-1}$ ,  $D = 1000 \text{ kgm}^{-3}$ ,  $m = 1 \text{ kg}$ ;

$$E_{\text{max}} = \frac{1 \times 2 \times 10^{-11} \times (2 \times 10^7)^2}{2 \times 1000} = 4 \text{ J}$$

$1 \text{ kW} = 1000 \text{ J/s} \Rightarrow 4 \text{ J}$  capacity is too small to have a useful effect

24)



$$\frac{x}{\sin 30} = \frac{5}{\sin 45}$$

$$x = \frac{5 \sin 30}{\sin 45} = \frac{5}{2} \cdot \sqrt{2}$$

$$= 2.5 \times 1.4 = 3.5 \text{ km}$$

25) a  $\Rightarrow c + r = 2s \Rightarrow r = 2s - c$  ①

b  $\Rightarrow c^2 + s^2 = r^2$  ②

c  $\Rightarrow 2c + s = 1 \Rightarrow s = 1 - 2c$  ③

③ in ①:  $r = 2(1 - 2c) - c = 2 - 5c$

In ②:  $c^2 + (1 - 2c)^2 = (2 - 5c)^2$

$$c^2 + 1 - 4c + 4c^2 = 4 - 20c + 25c^2$$

$$0 = 20c^2 - 16c + 3$$

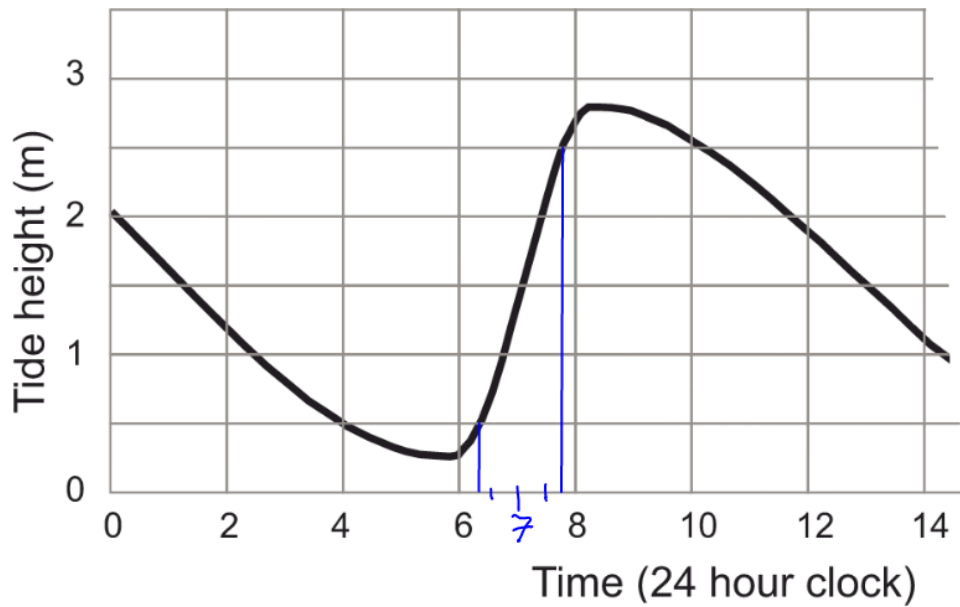
$$= (10c - 3)(2c - 1)$$

$$c = \frac{3}{10} \text{ or } \frac{1}{2}$$

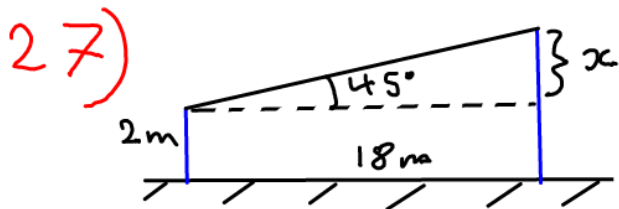
From ③,  $c$  cannot be  $\frac{1}{2}$ , as this would give  $s = 0$

$\therefore c = 0.3 \text{ m}, s = 0.4 \text{ m}, r = 0.5 \text{ m}$

26) Most rapid change is when the gradient is the steepest  $\Rightarrow$  7am



$$m = \frac{\Delta h}{\Delta t} = \frac{250 - 50}{105 - 15} = 2.2 \text{ cm/min}$$



$$\tan 45 = \frac{x}{18}$$

$$x = 18 \text{ m}$$

a)  $s = 20 \text{ m}$ ,  $u = 0$ ,  $v = x$ ,  $a = 10 \text{ m/s}^2$ ,  $t = ?$

$$s = ut + \frac{1}{2}at^2$$

$$20 = 5t^2$$

$$t = 2 \text{ s}$$

b)  $v^2 = u^2 + 2as$

$$v = \sqrt{2 \times 10 \times 20} = 20 \text{ m/s}^{-1}$$

c)  $\frac{1}{2}mv^2 = Fd$

$$F = \frac{0.5 \times 0.02 \times 20^2}{1 \times 10^{-3}} = 4 \text{ kN}$$

d)  $WD = Fd = 4 \times 10^3 \times 1 \times 10^{-3} = 4 \text{ J}$

$$GPE = mgh = 0.02 \times 10 \times 20 = 4 \text{ J} = WD$$

$$e) d = 5 \text{ cm} \Rightarrow F = \frac{0.5 \times 0.02 \times 20^2}{0.05} = 80 \text{ N}$$

$$Ft = mv - mu$$

$$t = \frac{0.02(0 - 20)}{-80} = \frac{1}{200} = 5 \text{ ms}$$

$$f) E_{\text{min}} = mgh = (100 + 0.02) \times 10 \times 20 = 2.0 \times 10^4 \text{ J}$$

$$g) E_{\text{min}} \times \text{efficiency} = mc \Delta T$$

$$\text{efficiency} = \frac{0.02 \times 4 \times 10^3 \times 80}{2 \times 10^4} = 32 \times 10^{-2}$$

$$= 32\%$$